


Airport Signs and Markings

Sign, sign. Everywhere a sign
Blockin' out the scenery. Breakin' my mind
Do this, don't do that.

Can't you read the sign?

Five Man Electric Band

1. What does this sign tell you?



What about this one?



2. Where are you, and where can you go from here?



3. How wide is runway 17 (on the right)? Runway 3 (below)?



4. What do the numbers on these runways (in question 3 – the '3' and the '17') designate?

5. Do the runway numbers ever change?
6. You are standing on this airport surface marking. What is the area on the right side of the marking called?



What is the area on the left side of the marking called?

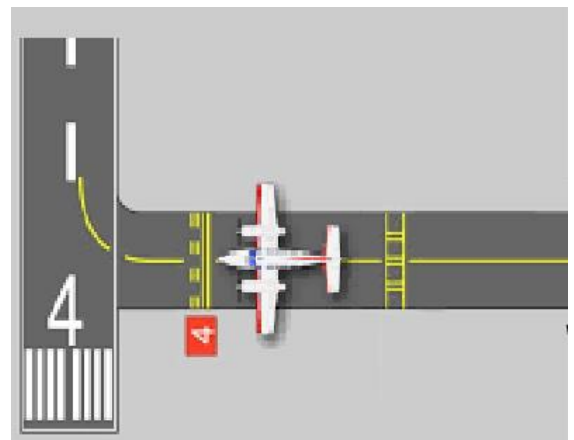
7. You can see these white markings anywhere on the airport surfaces. What do these designate?



8. You have moved your aircraft to the location designated by this symbol. What are you going to do here?



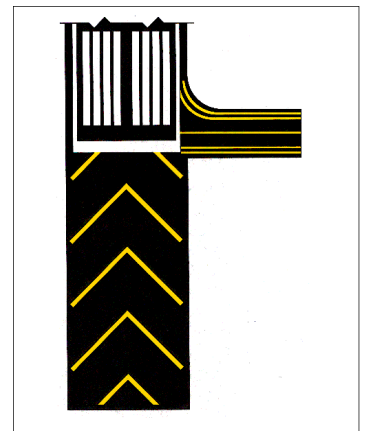
9. You are at your home airport where you are going to depart on runway 4 – you've done this a thousand times: File your flight plan, get clearance, then get taxi instructions and go to runway 4 and hold short. Today the ceiling is overcast 600 feet and visibility is 1 ½ mile. You read back (correctly) your taxi instructions and then taxi and hold short of runway 4 *just like you always do as shown in the diagram at the right*. You look to your left and see an aircraft on approach, a few miles away, just inside the middle marker. What might happen?



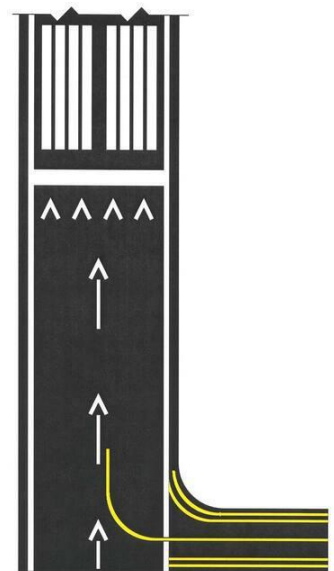
10. You see this light –alternately flashing between the left and right side.
Where are you?



11. What can the part of the runway in the lower portion of the picture at right (the part below the point where the taxiway intersects the runway) be used for?



12. What can the part of the runway shown in the lower portion of the picture at right (the portion where the long single arrows pointing upward towards)



13. Where would you see these surface markings?
Why are they used?



14. What is this sign telling you?



15. When ATC asks you to inform them about something in particular, how does this sign help you know when to do this?



16. You are holding at this sign – once you are cleared to proceed will you cross a runway? If so, which runway?



17. You see this surface marking:
a. Where do you typically see this?
b. Why is it there?
c. When can you cross this?



18. What does this sign mean?

